


Реши примеры на вычитание и впиши полученные ответы.



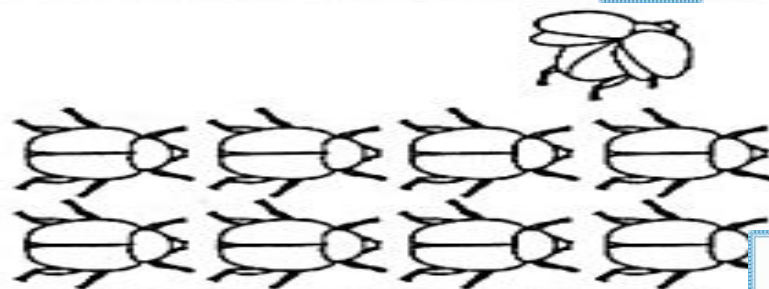
$$7 - 3 = \boxed{4}$$



$$6 - 1 = \boxed{5}$$



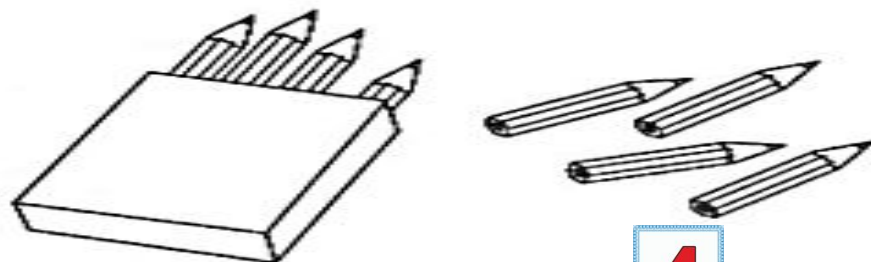
$$8 - 2 = \boxed{6}$$



$$9 - 1 = \boxed{8}$$



$$6 - 2 = \boxed{4}$$



$$8 - 4 = \boxed{4}$$