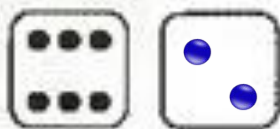
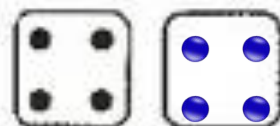


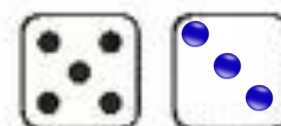
**2** Дорисуй точки на пустых фишках и допиши равенства.



$$6 + \boxed{2} = 8$$



$$4 + \boxed{4} = 8$$



$$5 + \boxed{3} = 8$$